

Hvor mange?

Kontext 2A · Kopimappe · Bestillingsnr.: 9024203 · © forlag Malling Beck

Læg puslespillet 1

Kontext 2A · Kopimappe · Bestillingsnr.: 9024203 · © forlag Malling Beck

The puzzle pieces contain the following numbers:

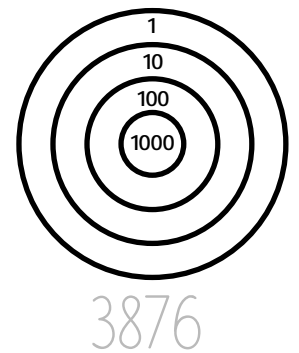
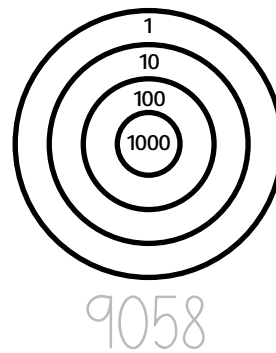
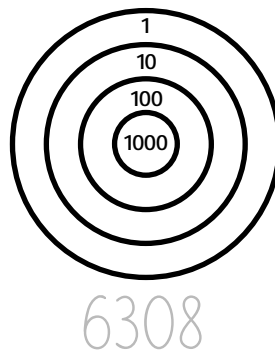
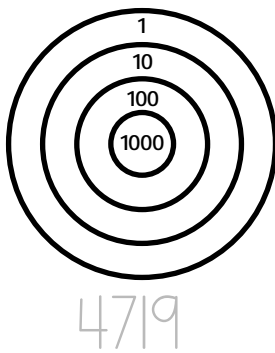
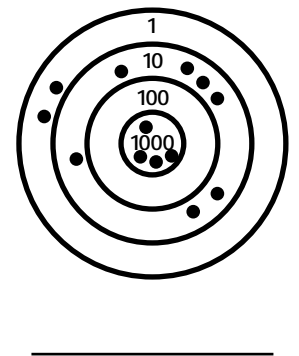
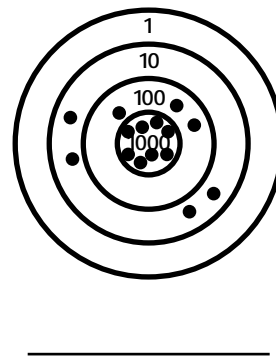
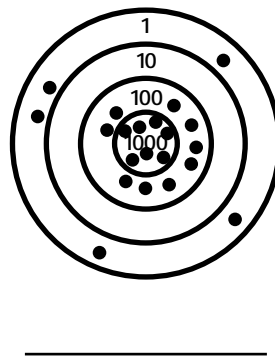
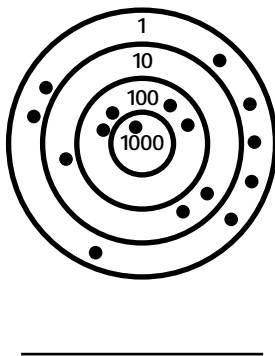
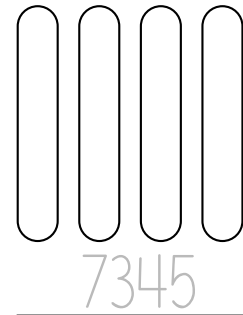
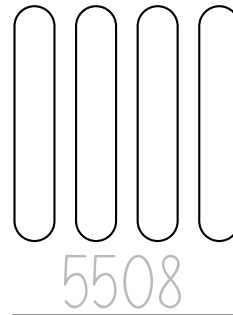
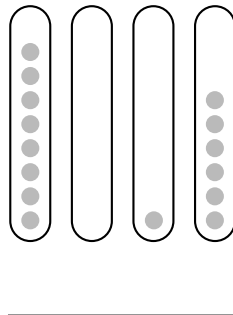
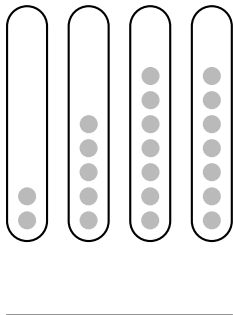
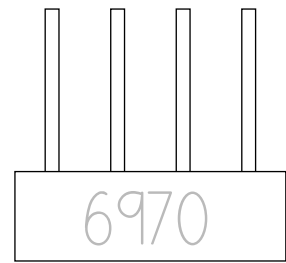
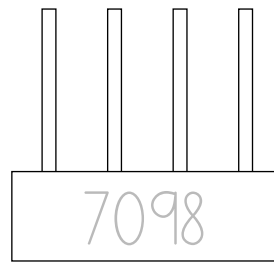
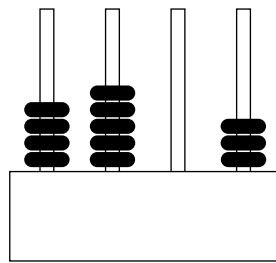
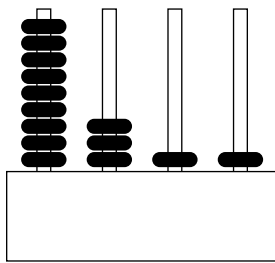
- 352, 353, 354, 355, 356, 357, 358, 359
- 342, 343, 344, 345, 346, 347, 348, 349
- 332, 333, 334, 335, 336, 337, 338, 339
- 322, 323, 324, 325, 326, 327, 328, 329
- 312, 313, 314, 315, 316, 317, 318, 319, 320, 321, 322
- 300, 301, 302, 303, 304, 305, 306, 307, 308, 309
- 292, 293, 294, 295, 296, 297, 298, 299, 300
- 280, 281, 282, 283, 284, 285, 286, 287, 288, 289
- 270, 271, 272, 273, 274, 275, 276, 277, 278, 279
- 260, 261, 262, 263, 264, 265, 266

Læg puslespillet 2

Kontext 2A · Kopimappe · Bestillingsnr.: 9024203 · © Forlag Malling Beck

Skriv og vis tallet

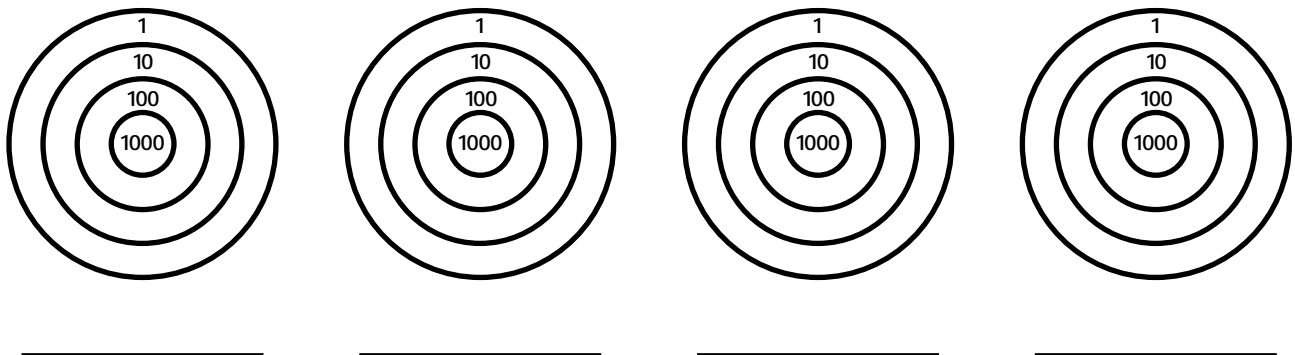
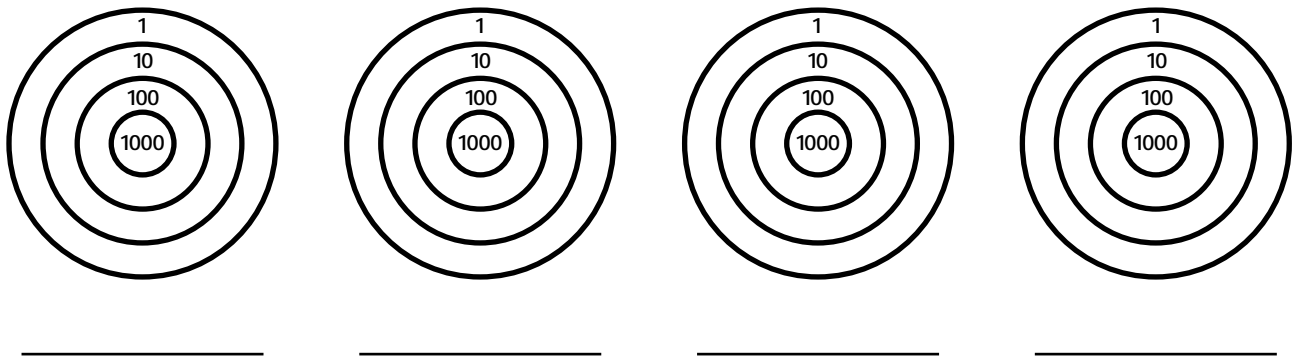
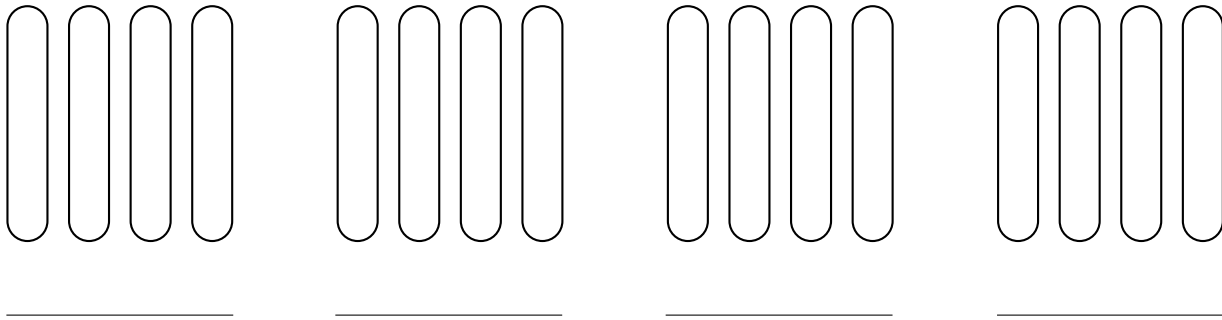
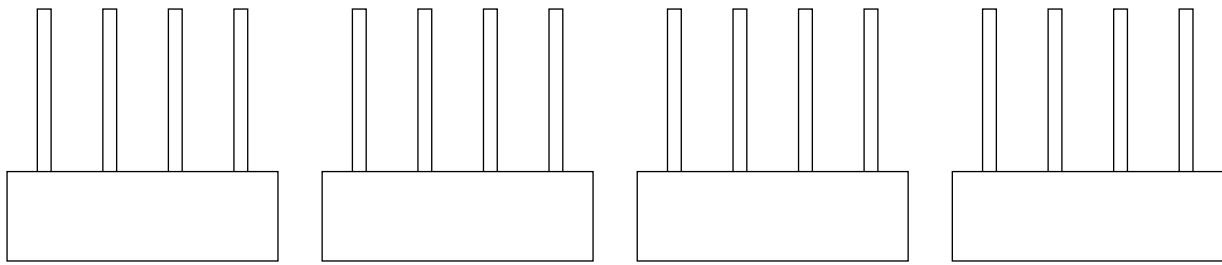
31



Kontext 2A · Kopimappe · Bestillingsnr.: 9024203 · © Forlag Malling Beck

Lav opgaver til en anden

32



Kontext 2A · Kopimappe · Bestillingsnr.: 9024203 · © forlag Malling Beck

NAVN

KLASSE

Hvor mange penge?

33

Kontext 2A · Kopimappe · Bestillingsnr.: 9024203 · © Forlag Malling Beck

_____ kr.

_____ kr.

_____ kr.

_____ kr.

_____ kr.

_____ kr.

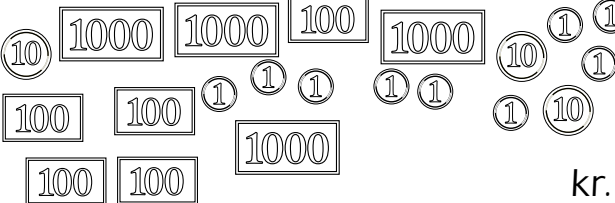





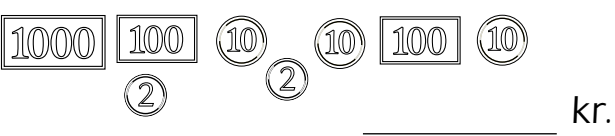
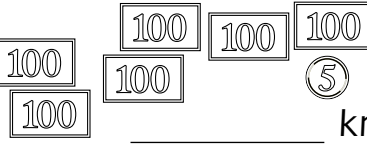
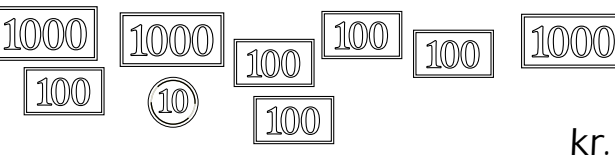

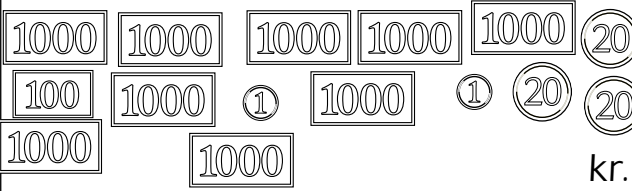
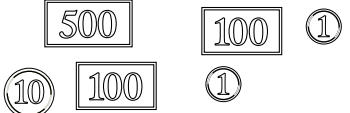
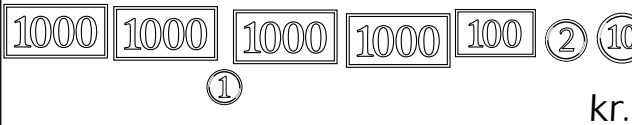
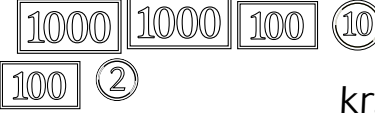
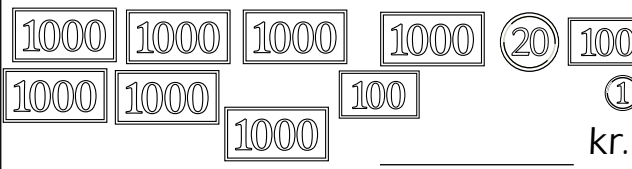
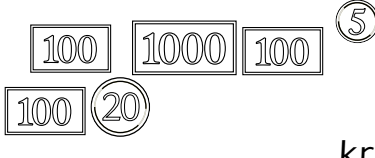
_____ kr.

_____ kr.

_____ kr.

_____ kr.

Hvor mange penge før og efter?

Du har	Du får	Du har nu
 <p>_____ kr.</p>	 <p>_____ kr.</p>	<p>_____ kr.</p>
 <p>_____ kr.</p>	 <p>_____ kr.</p>	<p>_____ kr.</p>
 <p>_____ kr.</p>	 <p>_____ kr.</p>	<p>_____ kr.</p>
 <p>_____ kr.</p>	 <p>_____ kr.</p>	<p>_____ kr.</p>
 <p>_____ kr.</p>	 <p>_____ kr.</p>	<p>_____ kr.</p>
 <p>_____ kr.</p>	 <p>_____ kr.</p>	<p>_____ kr.</p>
 <p>_____ kr.</p>	 <p>_____ kr.</p>	<p>_____ kr.</p>
 <p>_____ kr.</p>	 <p>_____ kr.</p>	<p>_____ kr.</p>

Hvad sker der med tallet?

35

	+	+ 0	+ 00	+ 000
7618				
5376				
2410				
6758				
3002				
7056				
2431				
6030				

	-	- 0	- 00	- 000
7921				
4632				
9192				
4876				
3691				
1592				
2174				
4567				

Plus eller minus?

36

$536 \oplus \underline{\quad\quad\quad} = 736$

$866 \square \underline{\quad\quad\quad} = 366$

$7871 \square \underline{\quad\quad\quad} = 5471$

$2423 \square \underline{\quad\quad\quad} = 1020$

$633 \square \underline{\quad\quad\quad} = 600$

$8900 \square \underline{\quad\quad\quad} = 9990$

$5423 \square \underline{\quad\quad\quad} = 8443$

$1414 \square \underline{\quad\quad\quad} = 2814$

$999 \square \underline{\quad\quad\quad} = 777$

$6440 \square \underline{\quad\quad\quad} = 8740$

$7100 \square \underline{\quad\quad\quad} = 2000$

$3920 \square \underline{\quad\quad\quad} = 1720$

$643 \square \underline{\quad\quad\quad} = 3645$

$3413 \square \underline{\quad\quad\quad} = 2213$

$212 \square \underline{\quad\quad\quad} = 12$

$4300 \square \underline{\quad\quad\quad} = 3300$

$855 \square \underline{\quad\quad\quad} = 2875$

$8413 \square \underline{\quad\quad\quad} = 6403$

$372 \square \underline{\quad\quad\quad} = 2370$

$692 \square \underline{\quad\quad\quad} = 600$

$3860 \square \underline{\quad\quad\quad} = 4865$

$2615 \square \underline{\quad\quad\quad} = 3715$

$761 \square \underline{\quad\quad\quad} = 560$

$5632 \square \underline{\quad\quad\quad} = 9832$

$9847 \square \underline{\quad\quad\quad} = 9040$


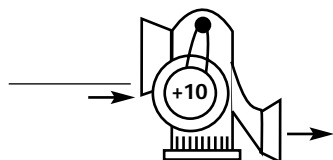




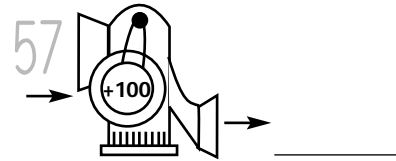
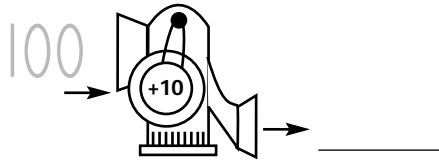
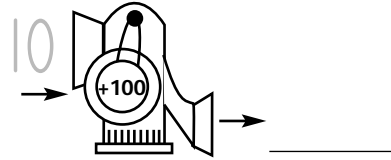
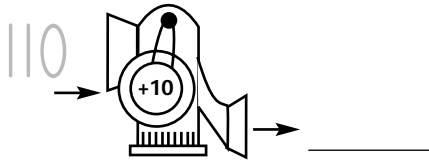
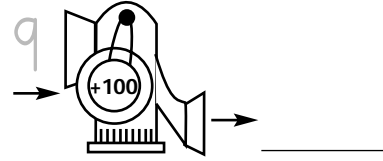
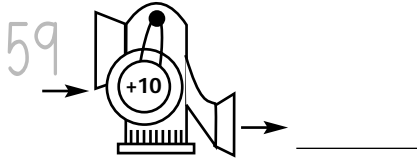
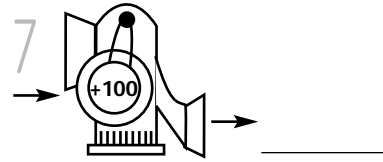

$818 \square \underline{\quad\quad\quad} = 800$

$1903 \square \underline{\quad\quad\quad} = 4905$

$4936 \square \underline{\quad\quad\quad} = 8948$


Talmaskinen

37



Kontext 2A · Kopimappe · Bestillingsnr.: 9024203 · © forlag Malling Beck

Talslangerne



NAVN

KLASSE