







Hvor mange penge skal du cirka betale?

38











 <p>_____ kr.</p>	 <p>_____ kr.</p>
 <p>_____ kr.</p>	 <p>_____ kr.</p>
 <p>_____ kr.</p>	 <p>_____ kr.</p>

<p>Køb for cirka 50 kr.</p>	<p>Køb for cirka 100 kr.</p>
-----------------------------	------------------------------

Kontext 2A · Kopimappe · Bestillingsnr.: 9024203 · © forlag Malling Beck

Hvor mange kroner?

39

 <p>_____ kr.</p>	 <p>_____ kr.</p>
 <p>_____ kr.</p>	 <p>_____ kr.</p>
 <p>_____ kr.</p>	 <p>_____ kr.</p>
 <p>_____ kr.</p>	 <p>_____ kr.</p>
 <p>_____ kr.</p>	 <p>_____ kr.</p>


Kontext 2A · Kopimappe · Bestillingsnr.: 9024203 · © Forlag Malling Beck






Tegn pengene






<p><u>3,75</u> kr.</p>	<p><u>2,50</u> kr.</p>
<p><u>6,25</u> kr.</p>	<p><u>10,50</u> kr.</p>






Hvad koster tingene?






Afrund og skriv regning






 AFRUND  _____ kr. _____ kr.   _____ kr. I alt cirka _____ kr.	 REGNING _____ KR. _____ KR. _____ KR. I ALT _____ KR.
---	--

 AFRUND  _____ kr. _____ kr.   _____ kr. I alt cirka _____ kr.	 REGNING _____ KR. _____ KR. _____ KR. I ALT _____ KR.
--	--

 AFRUND  _____ kr. _____ kr.   _____ kr. I alt cirka _____ kr.	 REGNING _____ KR. _____ KR. _____ KR. I ALT _____ KR.
--	--


 AFRUND  _____ kr. _____ kr.   _____ kr. I alt cirka _____ kr.	 REGNING _____ KR. _____ KR. _____ KR. I ALT _____ KR.
---	--




 AFRUND  _____ kr. _____ kr.   _____ kr. I alt cirka _____ kr.	 REGNING _____ KR. _____ KR. _____ KR. I ALT _____ KR.
---	--

 AFRUND  _____ kr. _____ kr.   _____ kr. I alt cirka _____ kr.	 REGNING _____ KR. _____ KR. _____ KR. I ALT _____ KR.
--	--


Skriv en regning





41

 Regning


 _____ kr.
 _____ kr.
 _____ kr.






I alt _____ kr.

 Regning


 _____ kr.
 _____ kr.
 _____ kr.
 _____ kr.







I alt _____ kr.

 Regning

 _____ kr.
 _____ kr.
 _____ kr.
 _____ kr.
 _____ kr.

I alt _____ kr.

 Regning

 _____ kr.
 _____ kr.
 _____ kr.
 _____ kr.
 _____ kr.
 _____ kr.

I alt _____ kr.

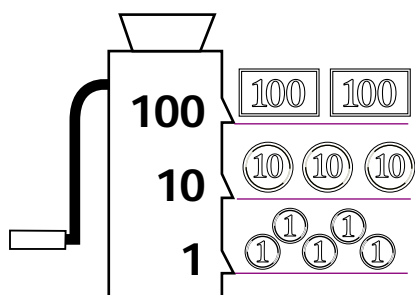
Køb for cirka 300 kr.

Køb for cirka 500 kr.

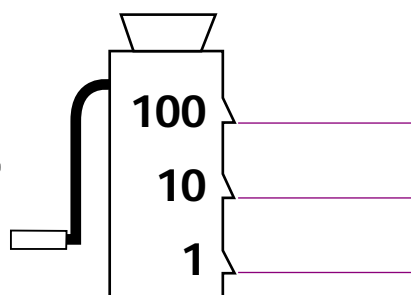
Kontext 2A · Kopimappe · Bestillingsnr.: 9024203 · © Forlag Malling Beck

Vekselmaskinen

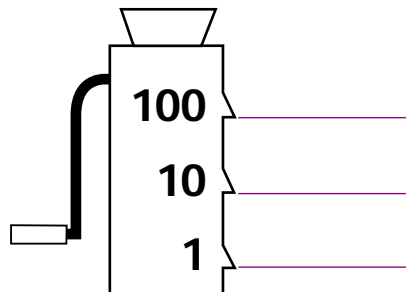
235 kr.



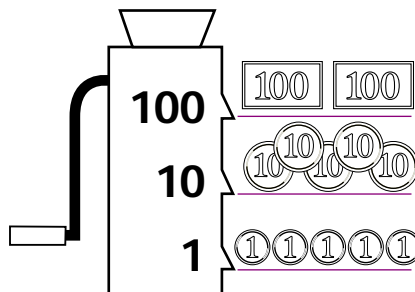
538 kr.



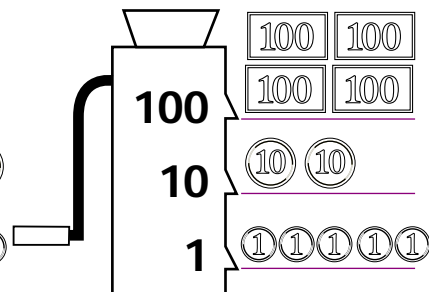
417 kr.



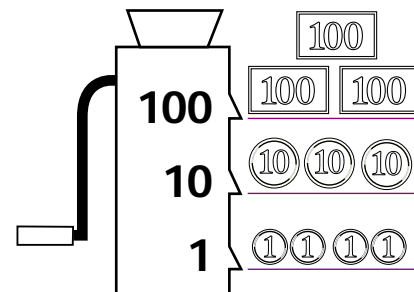
kr.



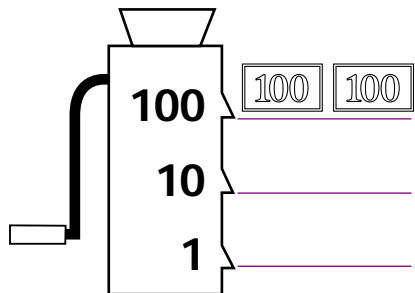
kr.



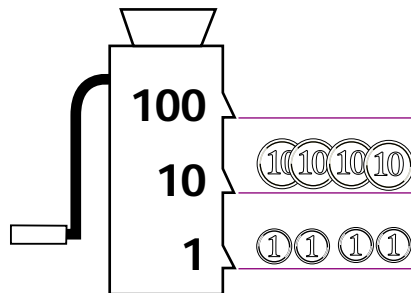
kr.



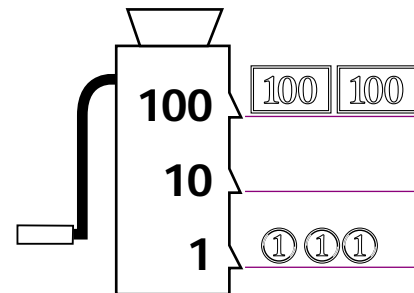
777 kr.



kr.



kr.



7 kr. + 80 kr. + 100 kr. = _____ kr.

4 kr. + 10 kr. + 100 kr. = _____ kr.


20 kr. + 20 kr. + 200 kr. = _____ kr.

7 kr. + 100 kr. + 1000 kr. = _____ kr.


10 kr. + 100 kr. + 1000 kr. = _____ kr.

90 kr. + 1000 kr. = _____ kr.


Hvad er klokken?




kl. _____




kl. _____



kl. _____




kl. _____




kl. _____

Halv 5




kl. _____


Kvart over 12




kl. 3.45




kl. 11.30




7:18




3:32



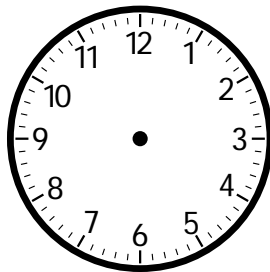
4:26




9:41




15:08



17:56



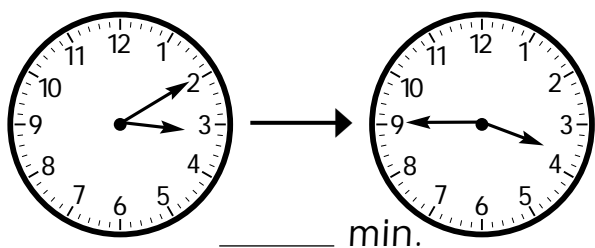
22:14



18:37

Hvor mange minutter er der gået?

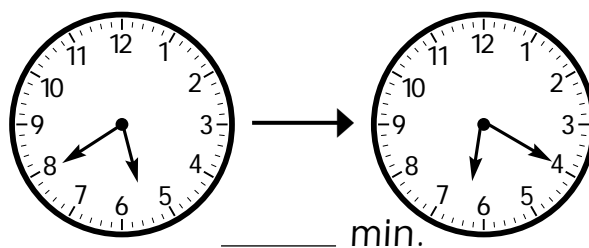
44



_____ min.

Kl. _____

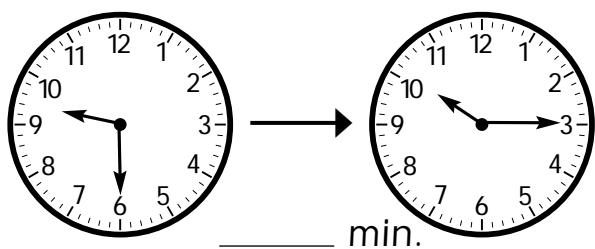
Kl. _____



_____ min.

Kl. _____

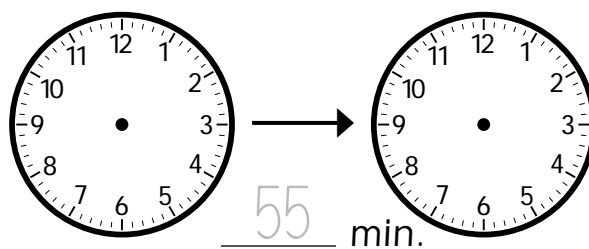
Kl. _____



_____ min.

Kl. _____

Kl. _____



55 min.

Kl. _____

Kl. _____

10 min. før	nu	15 min. efter
	7.20	
	9.35	
	16.15	
	8.10	
	20.05	
	4.45	
	2.50	
	11.00	

20 min. før	nu	30 min. efter
	1.30	
	6.15	
	3.50	
	14.25	
13.00		
5.50		
		21.30
		18.05

Lav din egen køreplan for Talbybussen 45

Kontext 2A · Kopimappe · Bestillingsnr.: 9024203 · © Forlag Malling Beck

KØREPLAN FOR TALBYBUSSEN	
Skole	_____ min.
Torv	_____ min.
Købmand	_____ min.
Gågade	_____ min.
Station	_____ min.
Posthus	_____ min.
Bager	_____ min.
Læge	_____ min.
Fabrik	_____ min.
Svømmehal	_____ min.
Park	_____ min.
Tandlæge	_____ min.
Legeplads	_____ min.
Pizzeria	_____ min.
Skole	_____ min.

KØREPLAN FOR TALBYBUSSEN	
Skole	_____ min.
Pizzeria	_____ min.
Legeplads	_____ min.
Tandlæge	_____ min.
Park	_____ min.
Svømmehal	_____ min.
Fabrik	_____ min.
Læge	_____ min.
Bager	_____ min.
Posthus	_____ min.
Station	_____ min.
Gågade	_____ min.
Købmand	_____ min.
Torv	_____ min.
Skole	_____ min.

KØREPLAN FOR	
.....	
_____	_____ min.
_____	_____ min.
_____	_____ min.
_____	_____ min.
_____	_____ min.
_____	_____ min.
_____	_____ min.
_____	_____ min.

KØREPLAN FOR	
.....	
_____	_____ min.
_____	_____ min.
_____	_____ min.
_____	_____ min.
_____	_____ min.
_____	_____ min.
_____	_____ min.
_____	_____ min.

Sæt i rækkefølge

47

2095	839	8820	1798
------	-----	------	------

1212	1143	1224	1089
------	------	------	------

3407	533	981	265
------	-----	-----	-----

9531	5410	8026	2999
------	------	------	------

7422	6004	5899	1367
------	------	------	------

9278	8016	4090	9999
------	------	------	------