
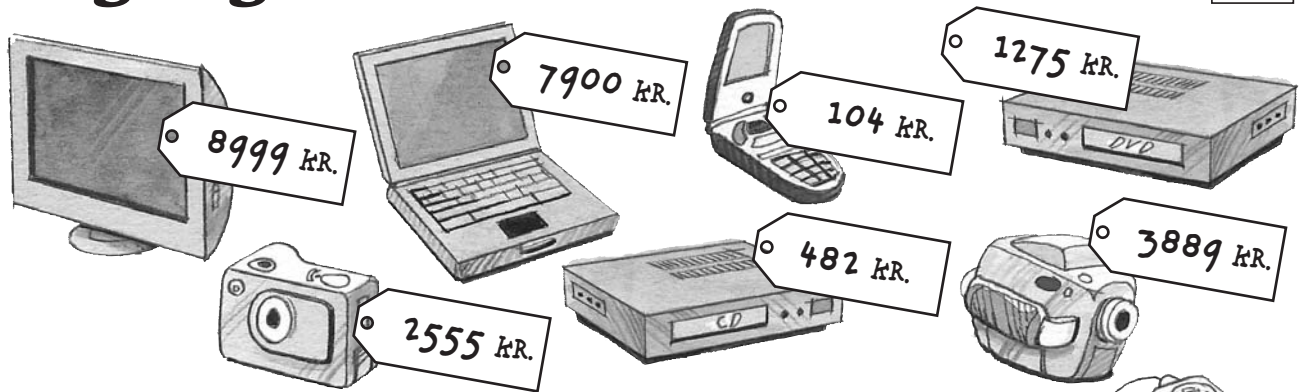


# Regninger

65



REGNING

VIDEOKAMERA \_\_\_\_\_ KR.

DVD-AFSPILLER \_\_\_\_\_ KR.

MP3-AFSPILLER \_\_\_\_\_ KR.

I ALT \_\_\_\_\_ KR.

REGNING

MØBILTELEFØN \_\_\_\_\_ KR.

DIGITALKAMERA \_\_\_\_\_ KR.

FJERNSYN \_\_\_\_\_ KR.

I ALT \_\_\_\_\_ KR.

REGNING

CD-AFSPILLER \_\_\_\_\_ KR.

MP3-AFSPILLER \_\_\_\_\_ KR.

FJERNSYN \_\_\_\_\_ KR.

I ALT \_\_\_\_\_ KR.

REGNING

BÆRBAR COMPUTER \_\_\_\_\_ KR.

MP3-AFSPILLER \_\_\_\_\_ KR.

MØBILTELEFØN \_\_\_\_\_ KR.

I ALT \_\_\_\_\_ KR.

## Tegn selv og regn

REGNING

\_\_\_\_\_ KR.

\_\_\_\_\_ KR.

\_\_\_\_\_ KR.

I ALT \_\_\_\_\_ KR.

REGNING

\_\_\_\_\_ KR.

\_\_\_\_\_ KR.

\_\_\_\_\_ KR.

I ALT \_\_\_\_\_ KR.

REGNING

\_\_\_\_\_ KR.

\_\_\_\_\_ KR.

\_\_\_\_\_ KR.

I ALT \_\_\_\_\_ KR.

# Plus eller minus

66

Hvad sker der med tallet?

	+	+  0	+  00	+  000
4324				
8756				
5613				
2100				
6438				
1547				
7802				
3000				

Skriv tallet. Skriv plus eller minus.

$$252 \boxed{+} \underline{\hspace{2cm}} = 552$$

$$1304 \boxed{\square} \underline{\hspace{2cm}} = 3314$$

$$3758 \boxed{\square} \underline{\hspace{2cm}} = 4558$$

$$830 \boxed{\square} \underline{\hspace{2cm}} = 410$$

$$5647 \boxed{\square} \underline{\hspace{2cm}} = 2247$$

$$918 \boxed{\square} \underline{\hspace{2cm}} = 1118$$

$$619 \boxed{\square} \underline{\hspace{2cm}} = 949$$

$$786 \boxed{\square} \underline{\hspace{2cm}} = 56$$

$$6360 \boxed{\square} \underline{\hspace{2cm}} = 6020$$

$$504 \boxed{\square} \underline{\hspace{2cm}} = 1004$$

$$1501 \boxed{\square} \underline{\hspace{2cm}} = 301$$

$$4720 \boxed{\square} \underline{\hspace{2cm}} = 5070$$

$$628 \boxed{\square} \underline{\hspace{2cm}} = 1068$$

$$2349 \boxed{\square} \underline{\hspace{2cm}} = 129$$



# Tegn selv og plus

68

$235 + 694 = \underline{\hspace{2cm}}$


$514 + 326 = \underline{\hspace{2cm}}$


$743 + 241 = \underline{\hspace{2cm}}$


$644 + 297 = \underline{\hspace{2cm}}$


$381 + 549 = \underline{\hspace{2cm}}$


$478 + 156 = \underline{\hspace{2cm}}$


$765 + 141 = \underline{\hspace{2cm}}$


$297 + 629 = \underline{\hspace{2cm}}$


Kontex 2B · Kopimappe · Bestillingsnr.: 9024213 · © forlag Malling Beck

# Plus med talkort

69

$536 + 398 =$  \_\_\_\_\_



$521 + 279 =$  \_\_\_\_\_



$145 + 657 =$  \_\_\_\_\_



$352 + 489 =$  \_\_\_\_\_



$463 + 341 =$  \_\_\_\_\_



$579 + 127 =$  \_\_\_\_\_



$652 + 178 =$  \_\_\_\_\_



$435 + 265 =$  \_\_\_\_\_




Kontext 2B · Kopmappe · Bestillingsnr.: 9024213 · © forlag Malling Beck


# Plus på tallinjen

70

$$323 + 451 = \underline{\hspace{2cm}}$$



$$618 + 275 = \underline{\hspace{2cm}}$$



$$165 + 739 = \underline{\hspace{2cm}}$$



$$387 + 109 = \underline{\hspace{2cm}}$$



$$714 + 566 = \underline{\hspace{2cm}}$$



$$248 + 689 = \underline{\hspace{2cm}}$$



$$355 + 617 = \underline{\hspace{2cm}}$$



$$+ = \underline{\hspace{2cm}}$$



$$+ = \underline{\hspace{2cm}}$$



# Plus

**71**

$323 + 141 = \underline{\hspace{2cm}}$	$103 + 418 = \underline{\hspace{2cm}}$	$710 + 209 = \underline{\hspace{2cm}}$
$681 + 219 = \underline{\hspace{2cm}}$	$514 + 53 = \underline{\hspace{2cm}}$	$621 + 256 = \underline{\hspace{2cm}}$
$538 + 199 = \underline{\hspace{2cm}}$	$101 + 651 = \underline{\hspace{2cm}}$	$56 + 807 = \underline{\hspace{2cm}}$
$420 + 269 = \underline{\hspace{2cm}}$	$769 + 120 = \underline{\hspace{2cm}}$	$313 + 127 = \underline{\hspace{2cm}}$
$677 + 144 = \underline{\hspace{2cm}}$	$441 + 89 = \underline{\hspace{2cm}}$	$238 + 187 = \underline{\hspace{2cm}}$
$810 + 47 = \underline{\hspace{2cm}}$	$903 + 93 = \underline{\hspace{2cm}}$	$633 + 222 = \underline{\hspace{2cm}}$
$391 + 255 = \underline{\hspace{2cm}}$	$41 + 761 = \underline{\hspace{2cm}}$	$861 + 191 = \underline{\hspace{2cm}}$
$277 + 67 = \underline{\hspace{2cm}}$	$305 + 106 = \underline{\hspace{2cm}}$	$514 + 286 = \underline{\hspace{2cm}}$
$811 + 69 = \underline{\hspace{2cm}}$	$623 + 209 = \underline{\hspace{2cm}}$	$1563 + 238 = \underline{\hspace{2cm}}$
$39 + 398 = \underline{\hspace{2cm}}$	$61 + 739 = \underline{\hspace{2cm}}$	$668 + 2715 = \underline{\hspace{2cm}}$
$502 + 99 = \underline{\hspace{2cm}}$	$5028 + 3102 = \underline{\hspace{2cm}}$	$4227 + 3783 = \underline{\hspace{2cm}}$

Vis, hvordan du regner.  $308 + 514$	
--	--

Vis, hvordan du regner.  $697 + 53$	
---	--

Kontext 2B · Kopmappe · Bestillingsnr.: 9024213 · © forlag Malling Beck

# Plus i tabellen

**72**

+	3	9	21	40	7	110	300	11	80	32	8	50	250
90													
45													
10													
37													
5													

Regn.

$6 + 199 = \underline{\hspace{2cm}}$

$518 + 8 = \underline{\hspace{2cm}}$

$7 + \underline{\hspace{1cm}} = 550$

$187 + \underline{\hspace{1cm}} = 206$

$364 + \underline{\hspace{1cm}} = 380$

$\underline{\hspace{1cm}} + 3 = 690$

$294 + 8 = \underline{\hspace{2cm}}$

$10 + 599 = \underline{\hspace{2cm}}$

$729 + \underline{\hspace{1cm}} = 740$

$5 + 697 = \underline{\hspace{2cm}}$

$439 + 9 = \underline{\hspace{2cm}}$

$\underline{\hspace{1cm}} + 3 = 494$

Udfyld tabellen.

+													
													57
				27									
									400				
						110							
	66												
		15											

Kontex 2B · Kopimappe · Bestillingsnr.: 9024213 · © forlag Malling Beck