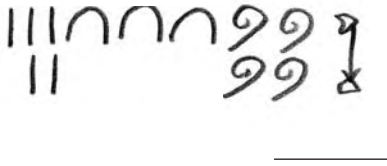
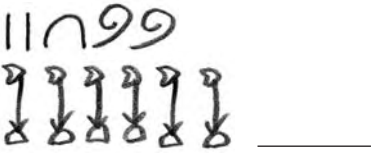


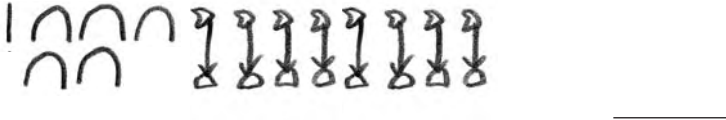
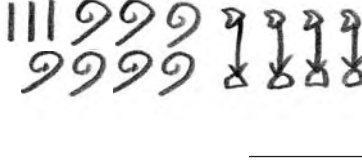
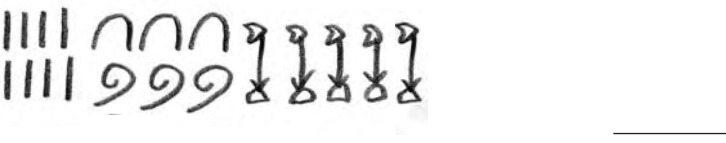
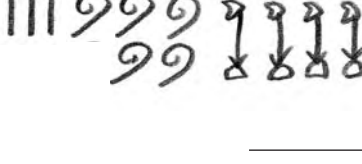
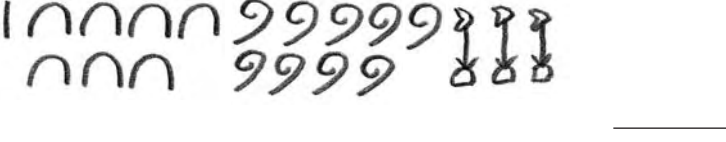


Tal og hieroglyffer

15

1 Hvilke tal står der her?

 _____	 _____	 _____
 _____	 _____	
 _____	 _____	
 _____	 _____	

2 Skriv tallene med hieroglyffer.

2611	7372	4913
8703	4050	6218
2328	4870	6060
9301	7842	3657

Flere hieroglyffer

16

1 Vælg to gangetabeller, og skriv dem med tal og hieroglyffer.

<input type="text"/>	<input type="text"/>	<input type="text"/>	<input type="text"/>	<input type="text"/>
<input type="text"/>	<input type="text"/>	<input type="text"/>	<input type="text"/>	<input type="text"/>

<input type="text"/>	<input type="text"/>	<input type="text"/>	<input type="text"/>	<input type="text"/>
<input type="text"/>	<input type="text"/>	<input type="text"/>	<input type="text"/>	<input type="text"/>

2 Regn stykkerne med hieroglyffer.

$178 + 390$	$296 - 171$
$1926 + 3561$	$3481 - 1720$
$2572 + 4860$	$6028 - 1735$

Tal og romertal

17

1 Hvilke tal står der her?

XC	XCVI	CXXVII	CCXIV
CCCI	CCCXCII	CDV	CDXX
DLXXXII	DXXXII	DCXXII	DCCLXVIII
CMI	CMLIII	DCCCIL	IM
MXXIV	MCCCXXXVII	MCCLXIII	MMCLXXXII
MMDCXIV	MMDCCCLXXXI	MMMXLII	MMMCCXXXIV

2 Skriv tallene med romertal.

72	54	117	221
338	448	519	559
638	609	742	816
772	899	975	990
1028	1234	1941	2007
2113	2628	3011	3456

Flere romertal

18

1 Vælg to gangetabeller, og skriv dem med tal og romertal.

<input type="text"/>	<input type="text"/>	<input type="text"/>	<input type="text"/>	<input type="text"/>
<input type="text"/>	<input type="text"/>	<input type="text"/>	<input type="text"/>	<input type="text"/>

<input type="text"/>	<input type="text"/>	<input type="text"/>	<input type="text"/>	<input type="text"/>
<input type="text"/>	<input type="text"/>	<input type="text"/>	<input type="text"/>	<input type="text"/>

2 Regn stykkerne med romertal.

$51 + 36$	$94 - 52$
$76 + 93$	$340 - 210$
$406 + 139$	$506 - 129$
$532 + 746$	$861 - 490$
$1371 + 1409$	$2362 - 1412$

Rigtig rækkefølge

1 Inddel tallinjen. Skriv tal på tallinjen. Sæt streg fra tal til tallinjen.

2 Udfyld tallinjerne.

Hop 1

20

1 Hop 10, 100, 1000 og 10 000.

+ 10	563	_____	_____	_____	_____	_____	_____	_____	_____
+ 100	563	_____	_____	_____	_____	_____	_____	_____	_____
+ 1000	563	_____	_____	_____	_____	_____	_____	_____	_____
+ 10 000	563	_____	_____	_____	_____	_____	_____	_____	_____
+ 10	4972	_____	_____	_____	_____	_____	_____	_____	_____
+ 100	4972	_____	_____	_____	_____	_____	_____	_____	_____
+ 1000	4972	_____	_____	_____	_____	_____	_____	_____	_____
+ 10 000	4972	_____	_____	_____	_____	_____	_____	_____	_____
+ 10	17846	_____	_____	_____	_____	_____	_____	_____	_____
+ 100	17846	_____	_____	_____	_____	_____	_____	_____	_____
+ 1000	17846	_____	_____	_____	_____	_____	_____	_____	_____
+ 10 000	17846	_____	_____	_____	_____	_____	_____	_____	_____

Kontext 3A · Kopmappe · Bestillingsnr.: 9024303 · © forlag Malling Beck

2 Hop.

-9	4936	-9	5002	-9	12 000
-8	16 007	-8	19 020	-8	25 000
-12	6900	-12	20 000	-12	26 106
-15	30 000	-15	31 004	-15	40 900
-99	4000	-99	3740	-99	20 000

Hop 2

1 Hop 10, 100 og 1000.

<u>2357</u>	+ 10 ↷		+ 1000 ↷		+ 100 ↷		+ 1000 ↷		+ 10 ↷	
<u>4891</u>	+ 100 ↷		+ 10 ↷		+ 1000 ↷		+ 100 ↷		+ 100 ↷	
<u>9880</u>	+ 1000 ↷		+ 100 ↷		+ 10 ↷		+ 100 ↷		+ 10 ↷	
<u>9999</u>	+ 10 ↷		+ 100 ↷		+ 1000 ↷		+ 100 ↷		+ 10 ↷	
	+ 100 ↷		+ 10 ↷		+ 1000 ↷	<u>1991</u>	+ 100 ↷		+ 1000 ↷	
	+ 100 ↷		+ 1000 ↷	<u>3789</u>	+ 10 ↷		+ 1000 ↷		+ 10 ↷	
	+ 10 ↷		+ 100 ↷		+ 1000 ↷		+ 100 ↷	<u>2103</u>	+ 1000 ↷	
	+ 10 ↷		+ 100 ↷		+ 1000 ↷		+ 10 ↷		+ 100 ↷	<u>10 000</u>

2 Hop.

Hop 50: 125 _____

Hop 150: 200 _____

Hop 75: 1000 _____

Hop 125: _____ 700 _____

Hop 250: _____ 900 _____

Hop 150: _____ 700 _____

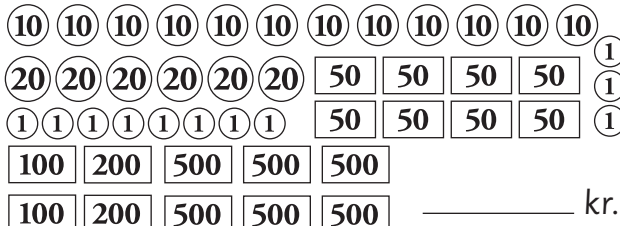
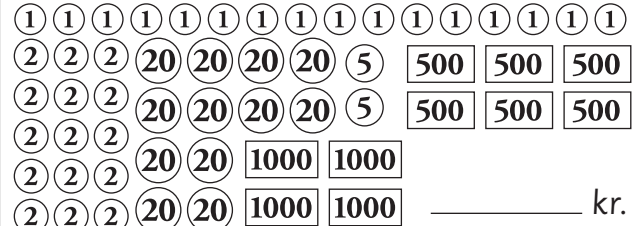
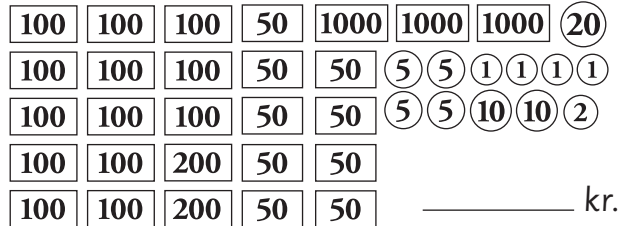
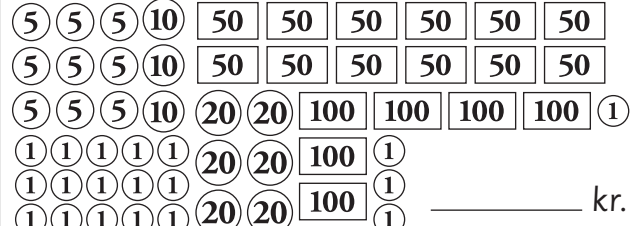
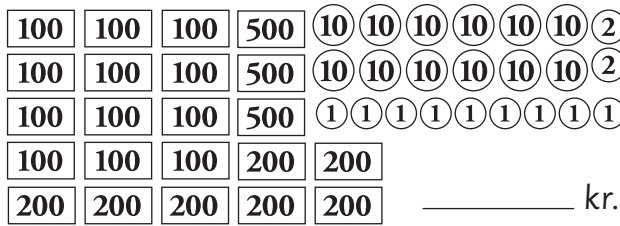
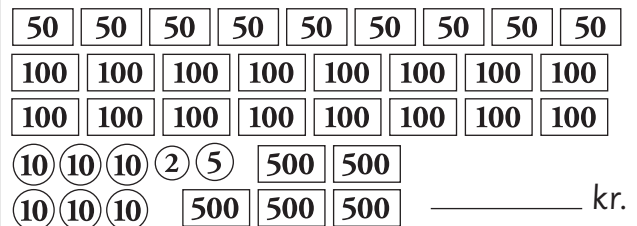

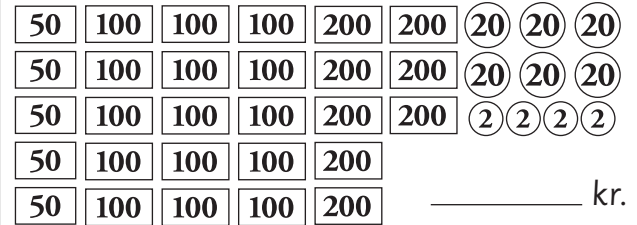
Hop 500: _____ 8100 _____

Hop 750: _____ 9000 _____

Penge og store tal

22

1 Hvor mange penge?

 <p>_____ kr.</p>	 <p>_____ kr.</p>
 <p>_____ kr.</p>	 <p>_____ kr.</p>
 <p>_____ kr.</p>	 <p>_____ kr.</p>
 <p>_____ kr.</p>	 <p>_____ kr.</p>

2 Hvad sker der med tallet?

	+ 1 000 000	+ 100 000	+ 10 000	+ 1000
6 284 037				
8 135 602				
4 210 781				

	- 1 000 000	- 100 000	- 10 000	- 1000
9 562 137				
8 451 228				
6 213 744				

Mange penge

23



1 Skriv børnene op i rækkefølge efter, hvor mange penge de har. Start med den rigeste.

2 Afrund beløbene til nærmeste 10'er, 100'er, 1000'er og 10 000'er.

	Nærmeste 10'er	Nærmeste 100'er	Nærmeste 1000'er	Nærmeste 10 000'er
Line	kr.	kr.	kr.	kr.
David	kr.	kr.	kr.	kr.
Nina	kr.	kr.	kr.	kr.
Jakob	kr.	kr.	kr.	kr.
Simone	kr.	kr.	kr.	kr.

3 Udfyld skemaet.

	Det dobbelte	Det dobbelte	Det dobbelte
Line	kr.	kr.	kr.
David	kr.	kr.	kr.
Nina	kr.	kr.	kr.
Jakob	kr.	kr.	kr.
Simone	kr.	kr.	kr.

Plus og minus

24

1 Regn plusstykkerne.

$3000 + 700 + 80 + 3 = \underline{\hspace{2cm}}$

$10\,000 + 3000 + 600 + 30 + 8 = \underline{\hspace{2cm}}$

$5000 + 200 + 40 + 7 = \underline{\hspace{2cm}}$

$70\,000 + 6000 + 100 + 20 + 4 = \underline{\hspace{2cm}}$

$8000 + 500 + 10 + 8 = \underline{\hspace{2cm}}$

$80\,000 + 9000 + 400 + 50 + 6 = \underline{\hspace{2cm}}$

$4000 + 300 + 70 + 9 = \underline{\hspace{2cm}}$

$90\,000 + 2000 + 700 + 80 + 3 = \underline{\hspace{2cm}}$

$\underline{\hspace{2cm}} + \underline{\hspace{2cm}} + \underline{\hspace{2cm}} + \underline{\hspace{2cm}} + \underline{\hspace{2cm}} = 29\,384$

$\underline{\hspace{2cm}} + \underline{\hspace{2cm}} + \underline{\hspace{2cm}} + \underline{\hspace{2cm}} + \underline{\hspace{2cm}} = 74\,761$

$\underline{\hspace{2cm}} + \underline{\hspace{2cm}} + \underline{\hspace{2cm}} + \underline{\hspace{2cm}} + \underline{\hspace{2cm}} = 52\,783$

$\underline{\hspace{2cm}} + \underline{\hspace{2cm}} + \underline{\hspace{2cm}} + \underline{\hspace{2cm}} + \underline{\hspace{2cm}} = 49\,626$

2 Skriv tallet. Skriv plus eller minus.

$2430 \square \underline{\hspace{2cm}} = 6480$

$42\,600 \square \underline{\hspace{2cm}} = 49\,800$

$6283 \square \underline{\hspace{2cm}} = 2243$

$98\,700 \square \underline{\hspace{2cm}} = 46\,200$

$9630 \square \underline{\hspace{2cm}} = 8520$

$26\,282 \square \underline{\hspace{2cm}} = 86\,487$

$7281 \square \underline{\hspace{2cm}} = 7488$

$19\,620 \square \underline{\hspace{2cm}} = 89\,940$

$2399 \square \underline{\hspace{2cm}} = 9999$

$87\,455 \square \underline{\hspace{2cm}} = 41\,255$

3 Regn stykkerne.

$4211 + 3496$	$9281 - 4963$	$4110 + 8432$	$4162 - 2834$
$9604 + 7631$	$8216 - 4960$	$6497 + 2678$	$7961 - 2488$
$2418 + 9617$	$7736 - 4108$	$5687 + 3879$	$2931 - 2744$
$4568 + 1296$	$6004 - 5061$	$9426 + 8711$	$8260 - 5771$