


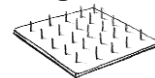


# 4. FIND AREALER PÅ SØMBRÆT



Du skal bruge:

Søembræt



Søembræt-  
papir



Elastikker



Arbejdsark:

7	8	9	10
---	---	---	----

## Find arealer på søembræt

Byg figurer på søembræt, og bestem arealet.  
Brug arbejdsark 7.

## Hvor mange kvadrater?

Lav figurer på søembræt, og find ud af, hvor store de er.  
Brug arbejdsark 8.

## Lav figurer med samme areal

Byg forskellige figurer på søembræt, hvor alle figurer er lige store.  
Brug arbejdsark 9.


## Gør figuren større og større

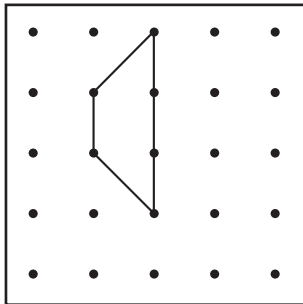
Byg en figur på søembræt, og gør den større og større.  
Brug arbejdsark 10.

# 4. Find arealer på sømbræt

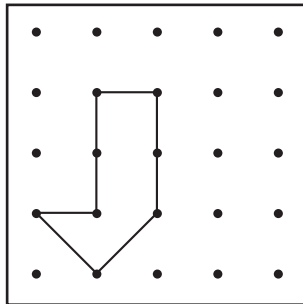
7

Find arealet. Lav først figuren på sømbrættet.

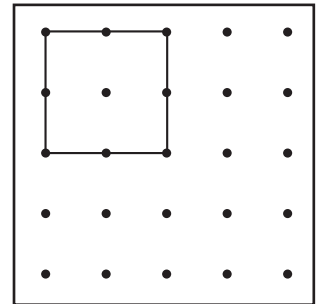
 = arealet 1



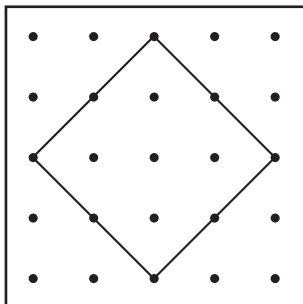
Areal \_\_\_\_\_



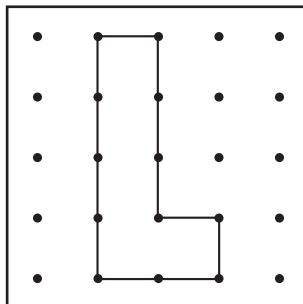
Areal \_\_\_\_\_



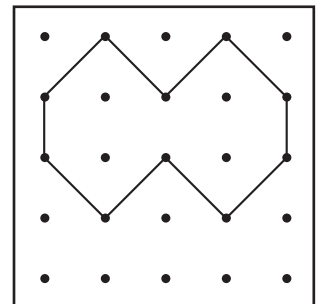
Areal \_\_\_\_\_



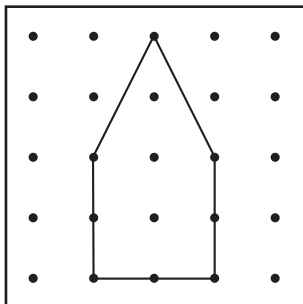
Areal \_\_\_\_\_



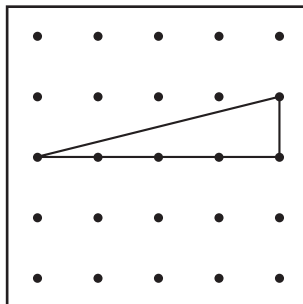
Areal \_\_\_\_\_



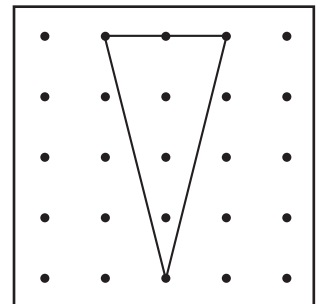
Areal \_\_\_\_\_



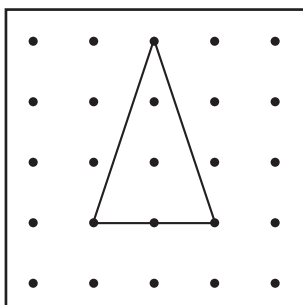
Areal \_\_\_\_\_



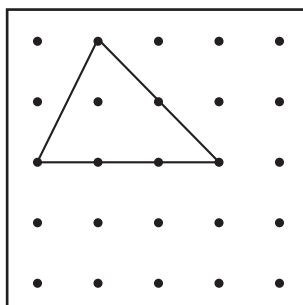
Areal \_\_\_\_\_



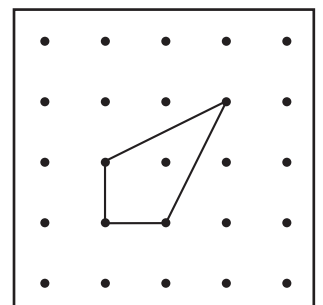
Areal \_\_\_\_\_



Areal \_\_\_\_\_



Areal \_\_\_\_\_



Areal \_\_\_\_\_

Kontext 3B · Kopmappe · Bestillingsnr.: 90.24313 · © forlag Malling Beck




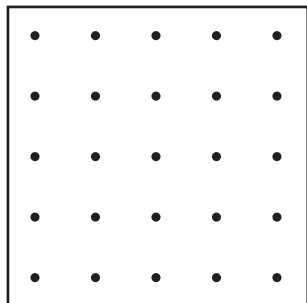
# 4. Find arealer på sømbræt

8


## Hvor mange kvadrater?

Lav figurer med forskellige arealer.

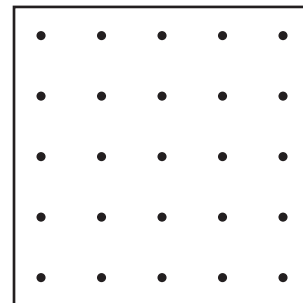
 = arealet 1




Areal \_\_\_\_\_



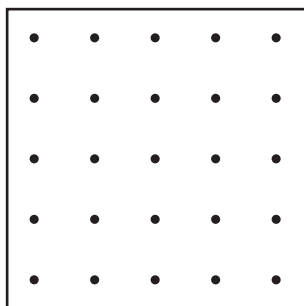
Areal \_\_\_\_\_



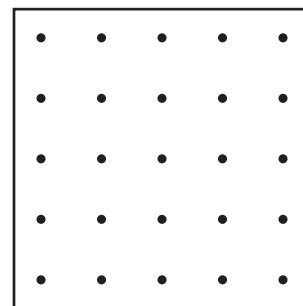
Areal \_\_\_\_\_




Areal \_\_\_\_\_



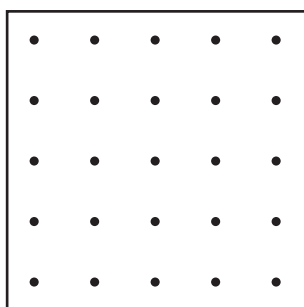
Areal \_\_\_\_\_



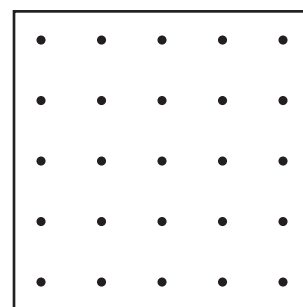
Areal \_\_\_\_\_




Areal \_\_\_\_\_



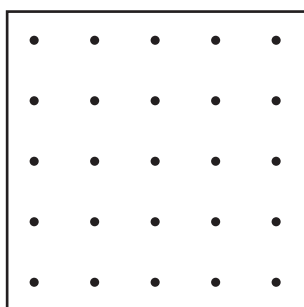
Areal \_\_\_\_\_



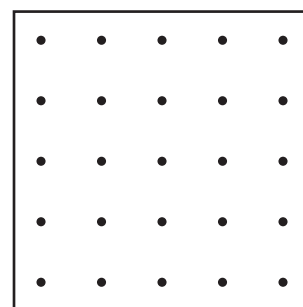
Areal \_\_\_\_\_



Areal \_\_\_\_\_



Areal \_\_\_\_\_



Areal \_\_\_\_\_




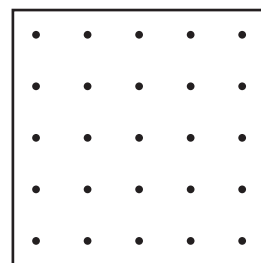
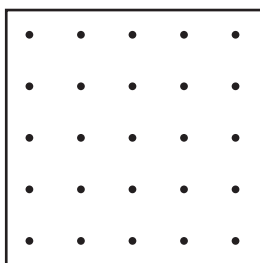
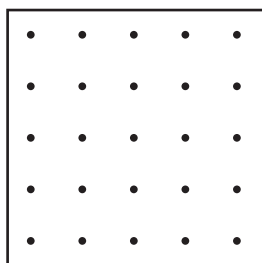
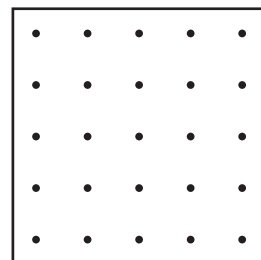
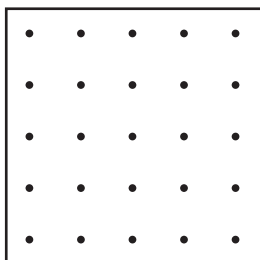
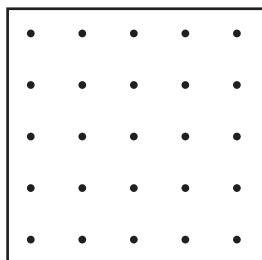
# 4. Find arealer på sømbræt

9

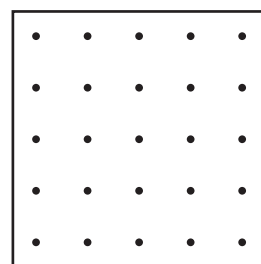
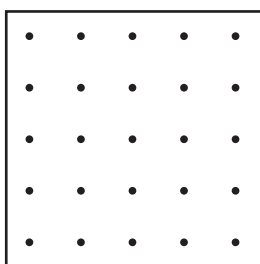
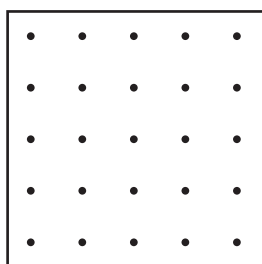
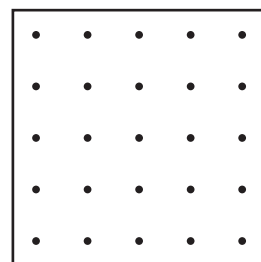
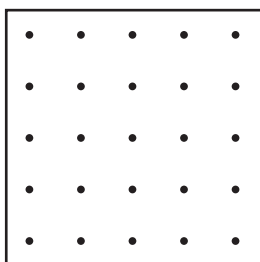
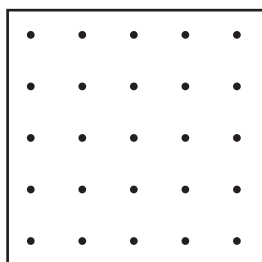
## Lav figurer med samme areal

1 Byg forskellige figurer, som alle har arealet 8.

 = arealet 1



2 Byg forskellige figurer, som alle har arealet 12.



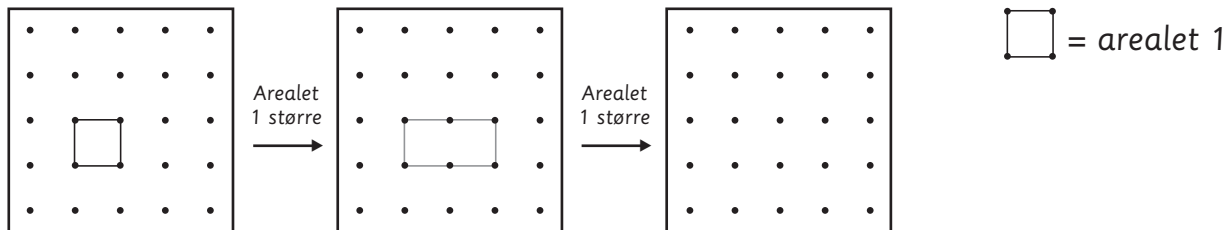


# 4. Find arealer på sømbræt

**10**

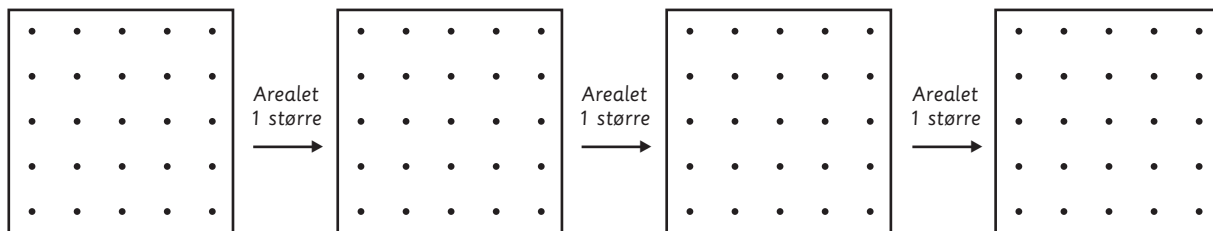
## Gør figuren større og større

**1** Byg figuren og følg pilene.



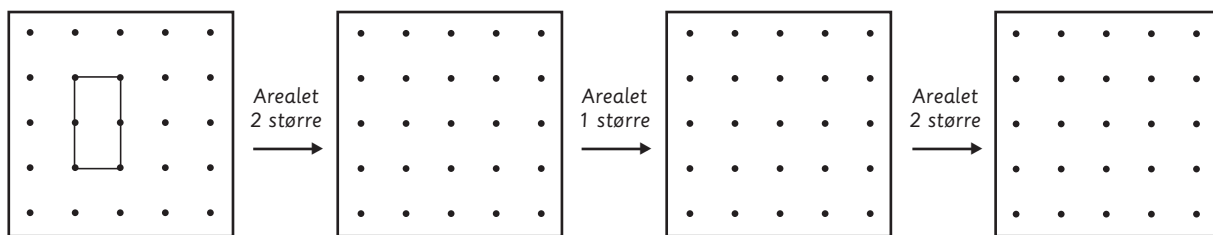
Areal \_\_\_\_\_

**2** Byg selv en figur og følg pilene.



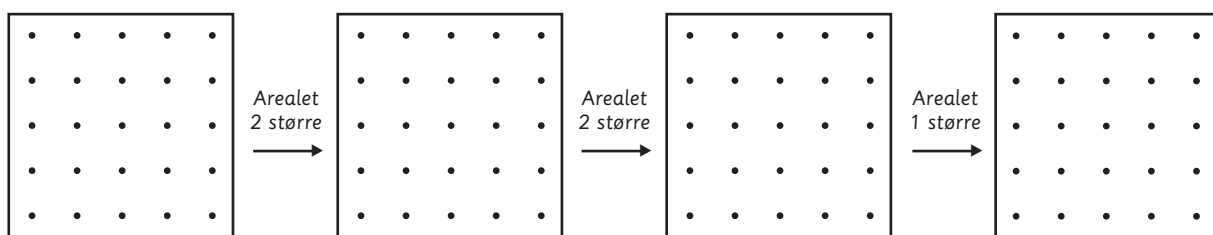
Areal \_\_\_\_\_

**3** Byg figuren og følg pilene.



Areal \_\_\_\_\_

**4** Byg selv en figur og følg pilene.



Areal \_\_\_\_\_